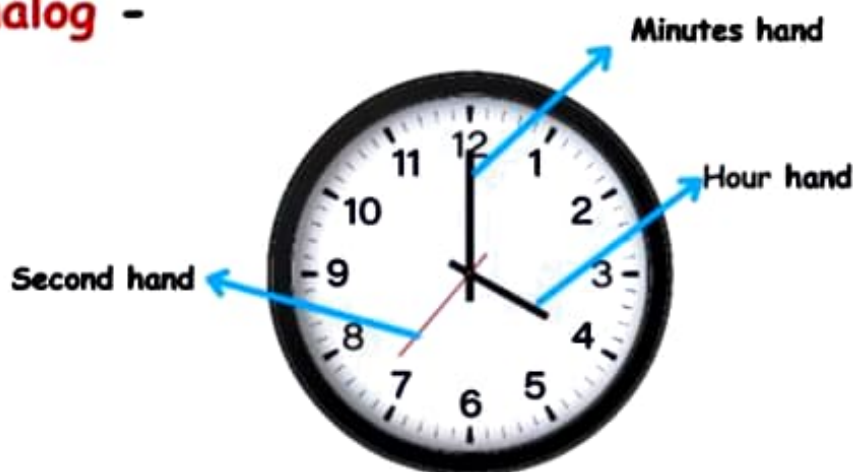


# Time

**Time** is a measurable duration of an event. Time can be measured in various units such as seconds, minutes, hours, days, years, etc.

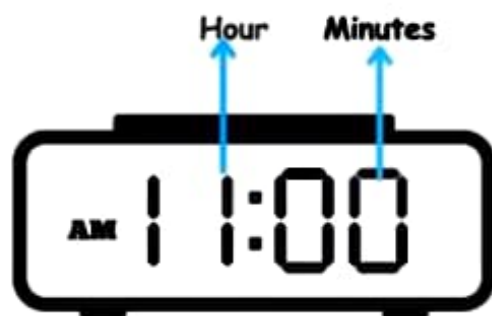
**Clock** is used to tell the time. There are two types of clocks.

## 1. **Analog** -



This analog clock uses moving hands to display the time.

## 2. **Digital** -



This digital clock displays time using numbers.



# AM

AM is for times that are in the morning!

AM starts at 12 midnight and goes until 11:59 in the morning.

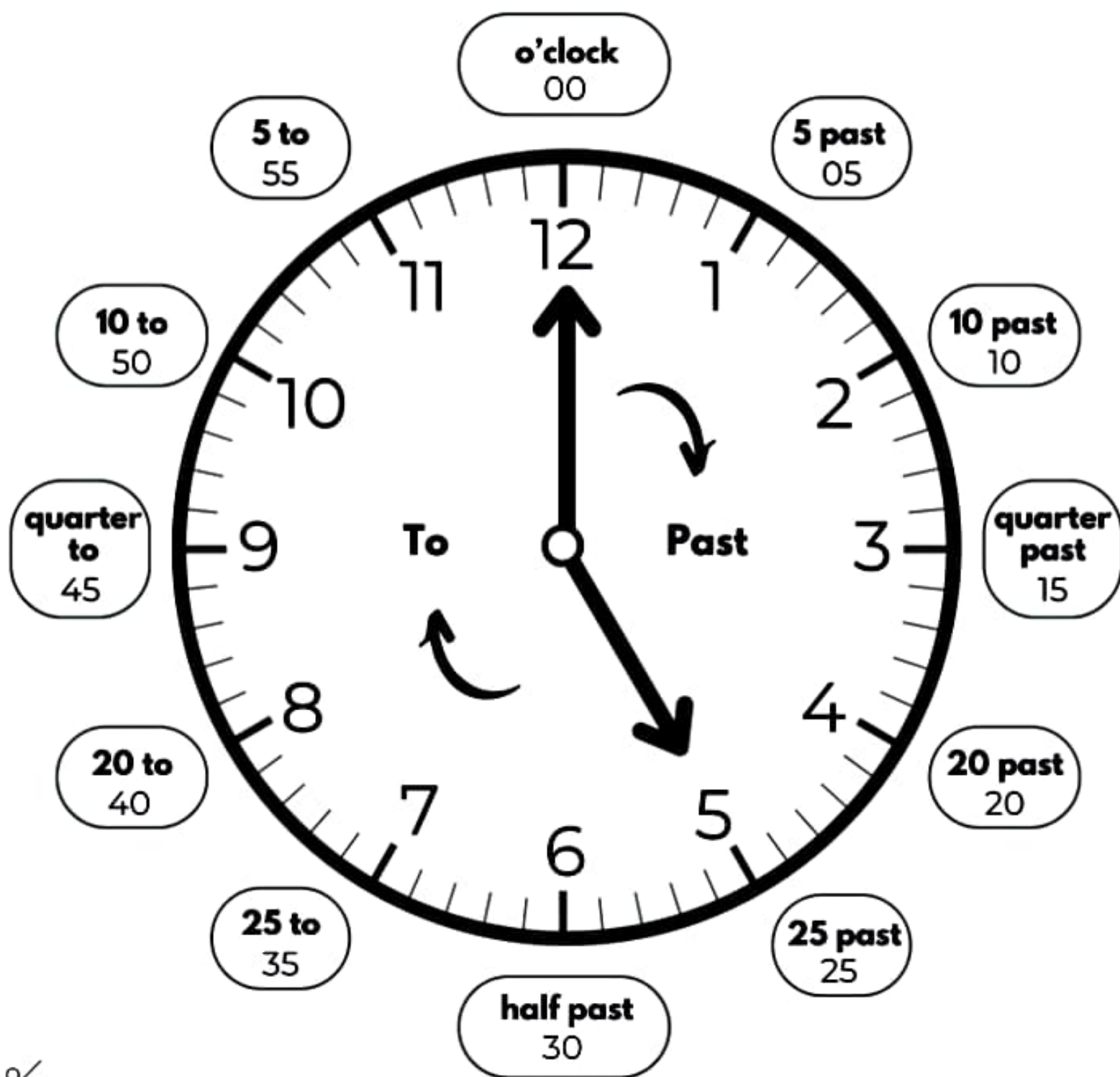
# PM

PM is for the times that are in the afternoon or evening!

PM starts at 12 noon and goes until 11:59 at night.



# TELLING TIME



# Telling Time

## WORKSHEET

### 1. Match the clocks with the correct times



1 - f



2 - \_\_\_\_



3 - \_\_\_\_



4 - \_\_\_\_



5 - \_\_\_\_



6 - \_\_\_\_

- a. it's a quarter to one    b. it's a quarter past eleven    c. it's twenty-five past nine    d. it's twenty to five    e. it's twenty-five to seven    f. it's five past seven

### 2. Write the digital time for each phrase

- |                         |       |                          |       |
|-------------------------|-------|--------------------------|-------|
| 1. Twenty-five to seven | 6:35  | 7. Ten past five         | _____ |
| 2. A quarter past four  | _____ | 8. Twenty to eleven      | _____ |
| 3. Ten to nine          | _____ | 9. Five to two           | _____ |
| 4. Five past twelve     | _____ | 10. Twenty-five past six | _____ |
| 5. Half past three      | _____ | 11. A quarter to ten     | _____ |
| 6. A quarter to eight   | _____ | 12. Ten o'clock          | _____ |

### 3. Write the time in words

- |          |                          |           |       |
|----------|--------------------------|-----------|-------|
| 1. 4:15  | it's a quarter past four | 7. 10:40  | _____ |
| 2. 8:50  | _____                    | 8. 1:55   | _____ |
| 3. 12:05 | _____                    | 9. 6:00   | _____ |
| 4. 3:30  | _____                    | 10. 9:45  | _____ |
| 5. 7:45  | _____                    | 11. 11:30 | _____ |
| 6. 5:10  | _____                    | 12. 3:50  | _____ |

### 4. What time do you usually do these things?

- |  |    |    |
|--|----|----|
| 1.  During the week, I usually wake up at ten to seven | 3. | 5. |
| 2.   | 4. | 6. |

# WHAT TIME IS IT?



- a. A quarter past five
- b. A quarter to five
- c. Three past five
- d. Five o'clock



- a. A half past seven
- b. A half past six
- c. A half to six
- d. Six o'clock



- a. Half past eight
- b. Four past eight
- c. Eight past four
- d. Twenty past eight



- a. Four to ten
- b. Ten past four
- c. Four past ten
- d. Ten to four



- a. Five to twelve
- b. One past one
- c. One past twelve
- d. Five past twelve



- a. A quarter to twelve
- b. Nine to twelve
- c. Twelve past nine
- d. Twelve to nine



- a. Seven past twelve
- b. Twelve past seven
- c. Twelve o'clock
- d. Seven o'clock



- a. Eight past six
- b. Six past eight
- c. Six to eight
- d. A half past eight



- a. Ten o'clock
- b. O'clock ten
- c. Twelve o'clock
- d. Ten past twelve



- a. A quarter past three
- b. A quarter past ten
- c. Ten past quarter
- d. Ten past three



- a. Twelve past one
- b. Twelve o'clock
- c. One o'clock
- d. One past twelve



- a. A quarter past nine
- b. A quarter to seven
- c. Seven past quarter
- d. Seven past nine



- a. Twenty five to six
- b. Six to seven
- c. Twenty five past seven
- d. Seven past six



- a. Twenty five to twelve
- b. One past five
- c. Five past one
- d. Twenty five past twelve



- a. Two past twelve
- b. Two o'clock
- c. Twelve o'clock
- d. Twelve to two



- a. Twenty to twelve
- b. Twenty past twelve
- c. Eight to twelve
- d. Twelve to eight



- a. Twenty past seven
- b. Seven past four
- c. Four past seven
- d. Seven to four



- a. Five to five
- b. Five to four
- c. Five past five
- d. Five o'clock



- a. Three past two
- b. Two past three
- c. Two to three
- d. Ten past three



- a. A half past one
- b. A half past six
- c. Six past one
- d. One past six